



NAME \_\_\_\_\_

DATE \_\_\_\_\_

## COUNTING THE NUMBERS

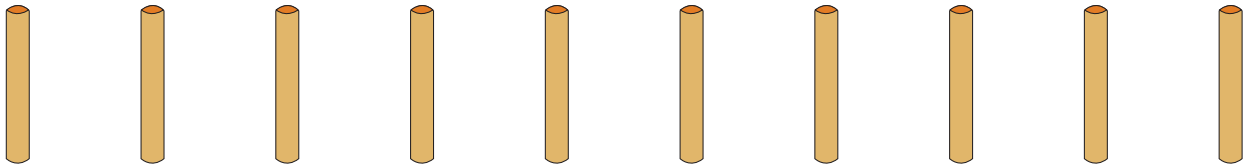
Counting the numbers by making the bundles 1's, 10's and 100's.

a) Bundles of 1's.



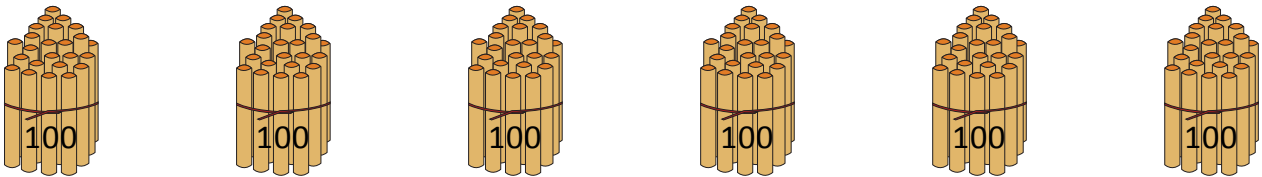
$$4 \text{ ones} = \underline{\quad}.$$

b) Bundles of 1's.




$$10 \text{ ones} = \underline{\quad}.$$

c) Bundles of 100's.



$$6 \text{ hundreds} = \underline{\quad}.$$

d) Bundles of 100's.



$$4 \text{ hundreds} = \underline{\quad}.$$

e) Bundles of 10's.



$$4 \text{ tens} = \underline{\quad}.$$